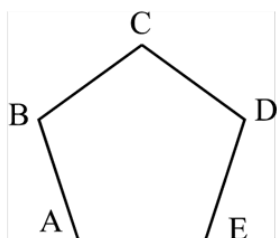


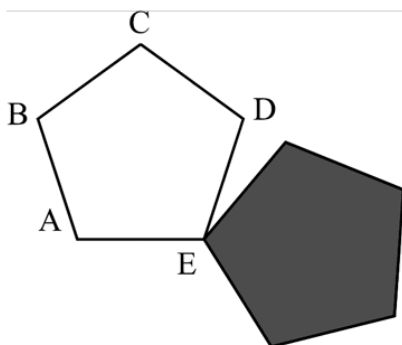
Exercício nº 304

Na figura está desenhado um pentágono regular $[ABCDE]$.

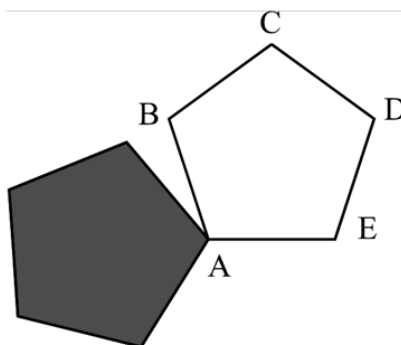


Em qual das quatro figuras que se seguem o pentágono sombreado é a imagem do pentágono $[ABCDE]$ obtida por meio de uma rotação de centro no ponto A e amplitude 180° ?

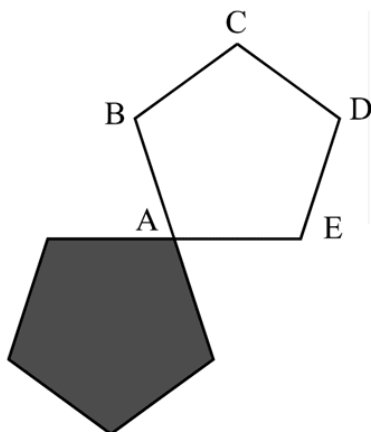
(A)



(B)



(C)



(D)

